
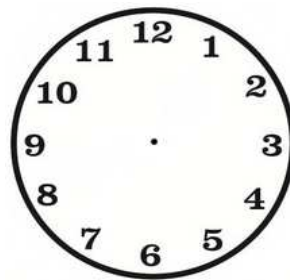



Disegna le lancette di ogni orologio



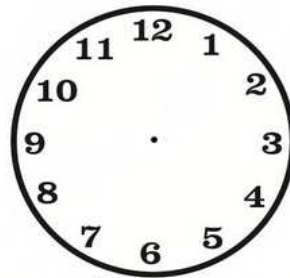
Tredici e dieci



Undici e un quarto




Quattro meno dieci




Tre e quarantacinque



Una meno un quarto




Due e mezza




**Tredici e tredici**



**Cinque meno cinque**



**Diciotto**



**Tre meno un quarto**



**Venti e trenta**



**Ventitrè**



**Quattordici e dieci**



**Otto meno venti**